

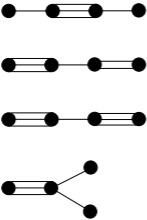
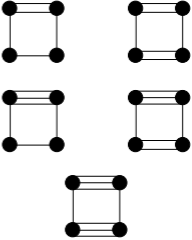
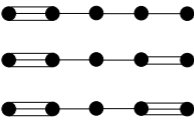
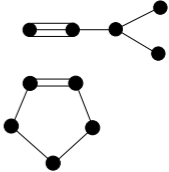


order	diagrams
2	
3	<div style="display: flex; align-items: center;">  <div> <p>where <math>2 \leq p, q, r \in \mathbb{N}</math></p> <p>and <math>\frac{1}{p} + \frac{1}{q} + \frac{1}{r} &lt; 1</math></p> </div> </div>
4	<div style="display: flex; justify-content: space-around;"> <div style="text-align: center;">  </div> <div style="text-align: center;">  </div> </div>
5	<div style="display: flex; justify-content: space-around;"> <div style="text-align: center;">  </div> <div style="text-align: center;">  </div> </div>